

## DATE

Monday 29th June



Halesowen C of E  
Primary School

## YEAR GROUP

4

### Choose 1 maths activity a day

Round these numbers to the nearest 10—remember 0,1,2,3,4 go down 5,6,7,8,9 go up e.g. 21 becomes 20  22, 35, 17, 49, 63	Round these numbers to the nearest 10—remember 0,1,2,3,4 go down 5,6,7,8,9 go up e.g. 114 becomes 110  89, 123, 165, 127, 242	A whole number is rounded to 370  Write down all the possible answers  Remember round to the nearest 10
---	---	---

### Choose 1 English activity a day

Look at the picture on the next page.  Complete the questions.  You can write the answers or just talk to an adult about them.	Look at the picture on the next page.  This sentence has mistakes in it. Can you correct them and then write 3 more brilliant sentences.  he held the leaf. It was raining. He could hear the storm. He could saw lightning.	Look at the picture on the next page.  Read the story starter... Can you write the next bit of the story?
--	--	--

### Choose 1 topic activity a day

Science— Living things

Create 2 plates. You can use things from around the house and take photos or draw 2 plates or collage.  One should include all of your favourite foods. One should include all the foods an Orangutan might eat.  How are they the same/ different?	Orangutans are omnivores—this means they eat plants and meat.  Can you name 3 animals that are carnivores (just eat meat)?  Can you name 3 animals that are herbivores (just eat plants)?  You can draw them if you like	Who's poo?  Find out what the words herbivore, Omnivore and carnivore mean?  We can tell what an animal eats by looking at their poo!  Look at the sheet and guess which poo
---	--	--

### Practise these skills everyday this week

Practise your year group spellings  (see the sheet at the end of the document)	Play TT Rockstars	Read for 10 minutes a day—it can be a book, something online— as long as you read
--	-------------------	---

### Practise these skills as often as you can.

I can help with the washing up	I can tie my shoe laces.	I can make a sandwich.
--------------------------------	--------------------------	------------------------

### Useful website links for extending learning

Find out more about Endangered animals <a href="https://www.natgeokids.com/uk/?s=orangutan&amp;post_type=">https://www.natgeokids.com/uk/?s=orangutan&amp;post_type=</a>	Place Value Maths Games <a href="https://www.topmarks.co.uk/maths-games/7-11-years/place-value">https://www.topmarks.co.uk/maths-games/7-11-years/place-value</a>
Science- Humans and the environment <a href="https://www.bbc.co.uk/bitesize/topics/zp22pv4">https://www.bbc.co.uk/bitesize/topics/zp22pv4</a>	Spelling Games <a href="https://www.spellzone.com/word_lists/games-5454.htm">https://www.spellzone.com/word_lists/games-5454.htm</a>



What kind of animal can you see in the photograph?

Where do you think he is?

How is the animal similar/different to a human?

Think of 3 adjectives( describing words) to describe the animal

It was another stiflingly humid day in the rainforest. The rain was a welcome and refreshing break from it. He could hear a rumble of distant thunder: a sure sign that this was just the beginning of the storm. Holding a large leaf over himself, he sat comfortably on the tree stump. Raindrops drummed on the flat surface of the leaf like impatient fingertips, but he didn't mind.

He stared into the forest, wondering when his companions would return...

# Science

## Whose poo?

Scientists drove around a reserve in Africa and found three different animal poos. Help them to match the items found in the poo to the animal you think produced it; then decide whether the animal is a carnivore, a herbivore or an omnivore. Write the number 1, 2 or 3 next to the pictures on the next page to match them to the poos below.

(1) The scientists found seeds and fur in this poo!



(2) The scientists found black and white fur in this poo!



(3) The scientists found dry grass in this poo!



---

Which one matches which?

- 1) A rhino
- 2) A lion
- 3) A baboon

**DATE**

Tuesday 30th June



**Halesowen C of E  
Primary School**


**YEAR GROUP**

4

**Choose 1 maths activity a day**

Look at the numbers. Can you draw tens sticks and ones to represent them. If you cannot draw make them out of things e.g. straws for tens and pennies for ones. ( see sheet)	Look at the numbers. Can you draw hundreds, tens sticks and ones to represent them. If you cannot draw make them out of things e.g. books for hundreds, straws for tens and pennies for ones. ( see sheet)	Create four, 4 digit numbers to fit the following rules:  The tens digit is 3  The hundreds digit is two more than the ones digit  The four digits have a total of 12
---	---	---

**Choose 1 English activity a day**

In the text about the picture it says  "He could hear a rumble of distant thunder..." What does this make you think is about to happen?  Can you write a different sentence/ sentences that would give us a clue a storm was coming- without saying	Write a description of the Orangutan in this picture.  Use the Fantastic's to help you.  	Compare the 2 photographs ? What can you tell me about each picture?  Think about who, where, when, what why ?  Think about clues in the pictures.
---	--	--

**Choose 1 topic activity a day**

**Science- Living things**

Think about what 3 things do you think you could not live without. Write a list or take a photo.  What about a baby- what do they need- is this different to you?  What about an Orangutan? is this different to you?	Orangutans live in rain forest. This is their habitat.  Can you find out 3 other animals that live in this habitat?- draw them.  Why doesn't a polar bear live in the rainforest?	What sort of animal is an orangutan? They are mammals just like you and me.  Can you find other rainforest animals who fit into these groups?  Bird, reptile, Amphibian, and fish. Make a piece of art including one of each type.
---	---	--

**Practise these skills everyday this week**

Practise your year group spellings  (see the sheet at the end of the document)	Play TT Rockstars	Read for 10 minutes a day- it can be a book, something online- as long as you read
--	-------------------	--

**Practise these skills as often as you can.**

I can help with the washing up	I can tie my shoe laces.	I can make a sandwich.
--------------------------------	--------------------------	------------------------

**Useful website links for extending learning**

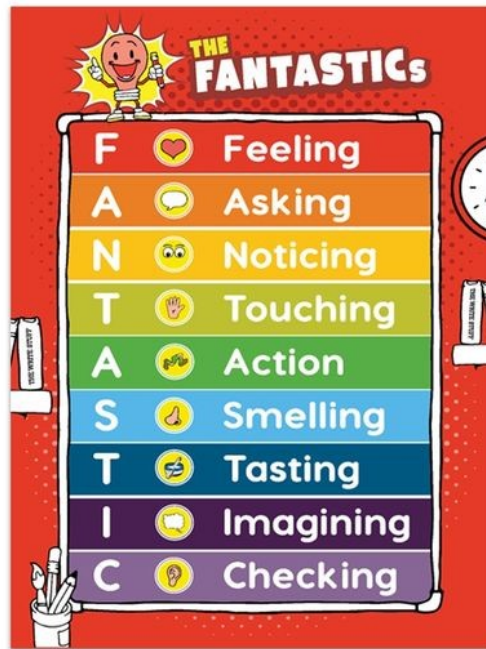
Find out more about Endangered animals <a href="https://www.natgeokids.com/uk/?s=orangutan&amp;post_type=">https://www.natgeokids.com/uk/?s=orangutan&amp;post_type=</a>	Place Value Maths Games <a href="https://www.topmarks.co.uk/maths-games/7-11-years/place-value">https://www.topmarks.co.uk/maths-games/7-11-years/place-value</a>
Science- Humans and the environment <a href="https://www.bbc.co.uk/bitesize/topics/zp22pv4">https://www.bbc.co.uk/bitesize/topics/zp22pv4</a>	Spelling Games <a href="https://www.spellzone.com/word_lists/games-5454.htm">https://www.spellzone.com/word_lists/games-5454.htm</a>

### Maths— activity 1

- 1) 42     |||| ●●
- 2) 36
- 3) 95
- 4) 21
- 5) 16

### Maths— activity 2

- 1) 123     ■ || ●●●
- 2) 174
- 3) 107
- 4) 285
- 5) 367



**DATE**

Wednesday 1st July



**Halesowen C of E  
Primary School**

**YEAR GROUP**

4

**Choose 1 maths activity a day**

Partition the following numbers: 27, 45, 36, 98, 125 For example: 26 is 20 and 6	We can partition in different ways so 38 can be 30 and 8 or can be 20 and 18. Can you find different ways to partition these 2 numbers: 45, 110, 27.	My number has 4 thousands and 301 ones. What is my number? How else could I describe it?
--	---	--

**Choose 1 English activity a day**

Look the information poster on the next page. Finish these sentences: Orangutan's like to eat.... They live for... They are.....tall	Read the information poster about orangutan's.( ask a grown up to help if you need them to. Be detectives and find the answers to the questions in the text.	Read the information poster about orangutan's. Label each box with what subtitle would work best—for example the first box could be labelled food or what they like to eat?
---	---	--

**Choose 1 topic activity a day**

**Geography**

Orangutans come from Borneo and Sumatra. These places are in the continent of Asia Look at the map pf Asia: <a href="https://geology.com/world/asia-satellite-image.shtml">https://geology.com/world/asia-satellite-image.shtml</a> Can you find Borneo and Sumatra?	Orangutans come from Borneo and Sumatra. These places are in the continent of Asia Look at the map pf Asia: <a href="https://geology.com/world/asia-satellite-image.shtml">https://geology.com/world/asia-satellite-image.shtml</a> Answer the questions on page 9	Orangutans come from Borneo and Sumatra. These places are in the continent of Asia Using the internet compare the UK to Borneo using the questions on page 10
---	---	--

**Practise these skills everyday this week**

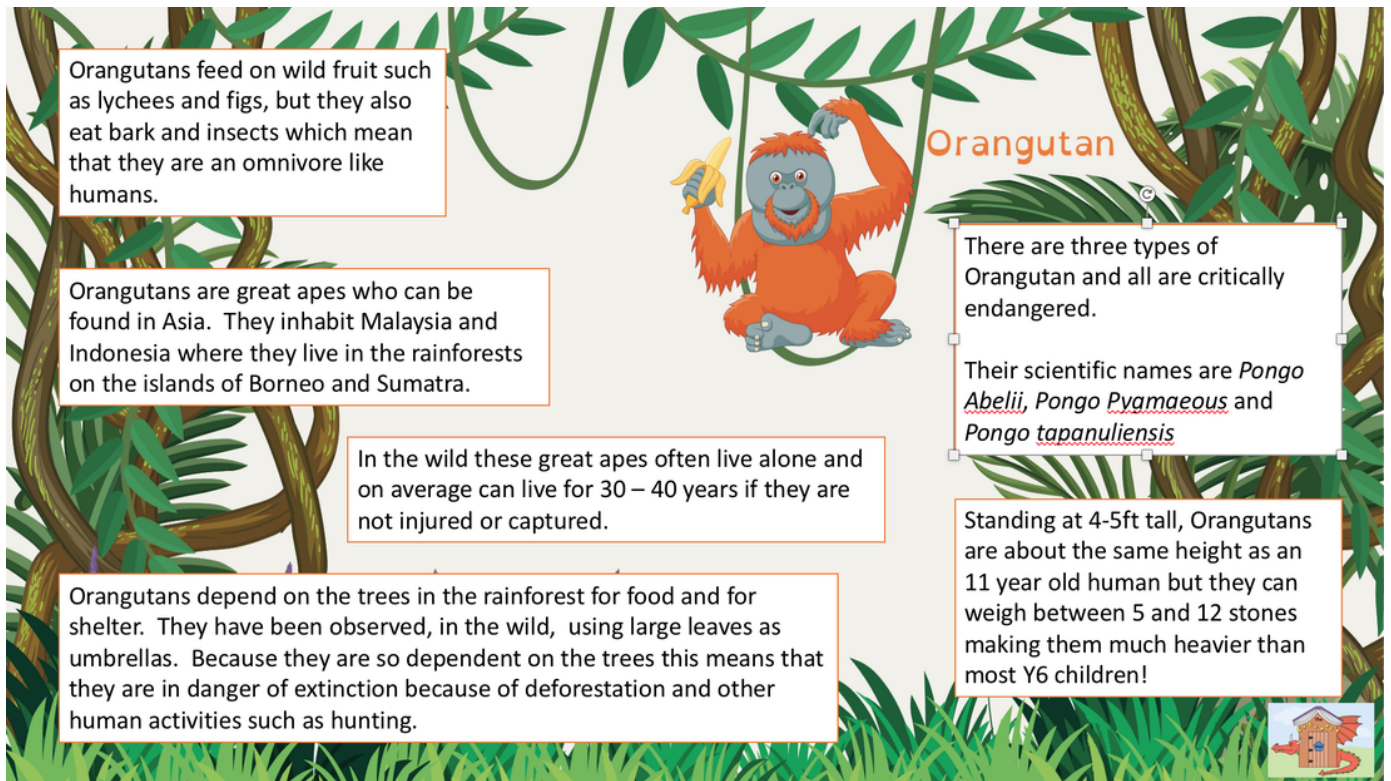
Practise your year group spellings (see the sheet at the end of the document)	Play TT Rockstars	Read for 10 minutes a day—it can be a book, something online— as long as you read
--	-------------------	---

**Practise these skills as often as you can.**

I can help with the washing up	I can tie my shoe laces.	I can make a sandwich.
--------------------------------	--------------------------	------------------------

**Useful website links for extending learning**

Find out more about Endangered animals <a href="https://www.natgeokids.com/uk/?s=orangutan&amp;post_type=">https://www.natgeokids.com/uk/?s=orangutan&amp;post_type=</a>	Place Value Maths Games <a href="https://www.topmarks.co.uk/maths-games/7-11-years/place-value">https://www.topmarks.co.uk/maths-games/7-11-years/place-value</a>
Science- Humans and the environment <a href="https://www.bbc.co.uk/bitesize/topics/zp22pv4">https://www.bbc.co.uk/bitesize/topics/zp22pv4</a>	Spelling Games <a href="https://www.spellzone.com/word_lists/games-5454.htm">https://www.spellzone.com/word_lists/games-5454.htm</a>



## Orangutan

Orangutans feed on wild fruit such as lychees and figs, but they also eat bark and insects which mean that they are an omnivore like humans.

Orangutans are great apes who can be found in Asia. They inhabit Malaysia and Indonesia where they live in the rainforests on the islands of Borneo and Sumatra.

In the wild these great apes often live alone and on average can live for 30 – 40 years if they are not injured or captured.

Orangutans depend on the trees in the rainforest for food and for shelter. They have been observed, in the wild, using large leaves as umbrellas. Because they are so dependent on the trees this means that they are in danger of extinction because of deforestation and other human activities such as hunting.

There are three types of Orangutan and all are critically endangered.

Their scientific names are *Pongo Abellii*, *Pongo Pyamaeous* and *Pongo tapanuliensis*

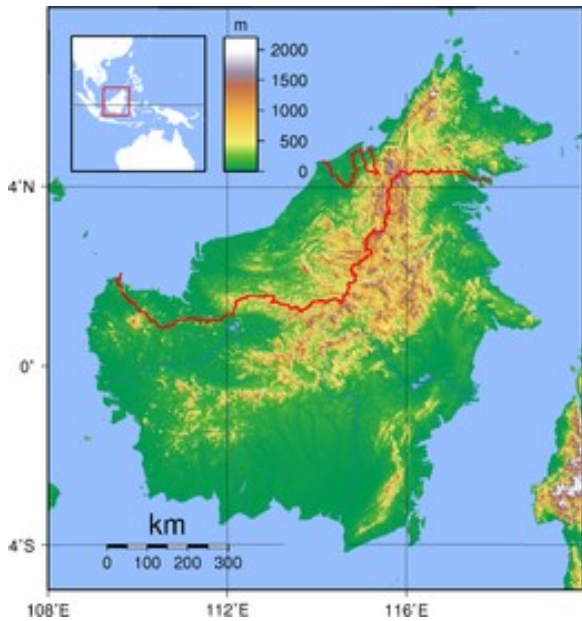
Standing at 4-5ft tall, Orangutans are about the same height as an 11 year old human but they can weigh between 5 and 12 stones making them much heavier than most Y6 children!

- 1) What Islands do the orangutans live on?
- 2) How tall are they?
- 3) What do they use large leaves for?
- 4) Which word means they are at risk or in danger?
- 5) What do they eat?
- 6) Why are they in danger of extinction?





- 1) Can you find Borneo and Sumatra?
- 2) Can you find China?
- 3) Can you find out which animal is well known as being from China?
- 4) Can you find Australia?
- 5) Can you find out which animal is well known as being from Australia?
- 6) Borneo is in South  Sea.



Borneo



UK

- 1) Which place has the highest population? ( this means the number of people living there)
- 2) What are the highest mountains called in each place?
- 3) What are the longest rivers in each place?
- 4) Borneo is the worlds third largest island— is it bigger than the UK?
- 5) Write 3 things the same and 3 things that are different about the two places?

## DATE

Thursday 2nd July



Halesowen C of E  
Primary School

## YEAR GROUP

4

### Choose 1 maths activity a day

There are 100 sweets in a jar—how many would there be in 6 jars?  If there were 1000 sweets in a jar—how many would there be in 6 jars?  What do you notice?	Complete the sheet counting up 1000s, 100s, tens and ones  Can you make the number 2537—either draw it or make out of objects to represent the 100s, 100, tens and ones	Use the clues to find the 4 digit number  The thousands and tens multiply together to make 36  The hundreds and tens have a total of 9  The ones digit is double to thousands digit  The whole number has a total of 21 if the digits are added together
--	---	--

### Choose 1 English activity a day

Orangutans are in danger because of deforestation in the rainforest.  Watch the video about it and make a card to send to an orangutan to say sorry for how people are spoiling their habitat.  <a href="https://www.youtube.com/watch?v=TQQXstNh45g">https://www.youtube.com/watch?v=TQQXstNh45g</a>	Orangutans are in danger because of deforestation in the rainforest.  Watch the video about it and create a poster about saving the orangutan's  <a href="https://www.youtube.com/watch?v=TQQXstNh45g">https://www.youtube.com/watch?v=TQQXstNh45g</a>	Orangutans are in danger because of deforestation in the rainforest.  Watch the video about it and Write a letter to the people cutting down the trees—explain to them why they should stop.  <a href="https://www.youtube.com/">https://www.youtube.com/</a>
---	--	---

### Choose 1 topic activity a day

#### Art

If you have a printer—print the colouring page and colour in the orangutan—can you add some trees into the background.	Using the step by step guide learn how to draw an orangutan—see the guide on the next page or watch one on you tube.	Choose a rainforest animal of your choice—can you create a piece of art—this could be a model, collage, drawing .  Be creative!!!
--	--	---

### Practise these skills everyday this week

Practise your year group spellings  (see the sheet at the end of the document)	Play TT Rockstars	Read for 10 minutes a day—it can be a book, something online— as long as you read
--	-------------------	---


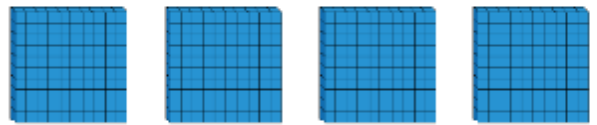

### Practise these skills as often as you can.

I can help with the washing up	I can tie my shoe laces.	I can make a sandwich.
--------------------------------	--------------------------	------------------------

### Useful website links for extending learning

Find out more about Endangered animals  <a href="https://www.natgeokids.com/uk/?s=orangutan&amp;post_type=">https://www.natgeokids.com/uk/?s=orangutan&amp;post_type=</a>	Place Value Maths Games  <a href="https://www.topmarks.co.uk/maths-games/7-11-years/place-value">https://www.topmarks.co.uk/maths-games/7-11-years/place-value</a>
Science- Humans and the environment  <a href="https://www.bbc.co.uk/bitesize/topics/zp22pv4">https://www.bbc.co.uk/bitesize/topics/zp22pv4</a>	Spelling Games  <a href="https://www.spellzone.com/word_lists/games-5454.htm">https://www.spellzone.com/word_lists/games-5454.htm</a>

Complete the sentences.



There are \_\_\_\_\_ thousands,  
\_\_\_\_\_ hundreds, \_\_\_\_\_  
tens and \_\_\_\_\_ ones.

The number is \_\_\_\_\_.

$$\underline{\quad} + \underline{\quad} + \underline{\quad} + \underline{\quad} = \underline{\quad}$$

**DATE**

Thursday 2nd July



**Halesowen C of E  
Primary School**

**YEAR GROUP**

4

**Choose 1 maths activity a day**

There are 100 sweets in a jar—how many would there be in 6 jars?  If there were 1000 sweets in a jar—how many would there be in 6 jars?  What do you notice?	Complete the sheet counting up 1000s tens and ones  Can you make the number 2537—either draw it or make out of objects to represent the 100s, 100, tens and ones	Use the clues to find the 4 digit number  The thousands and tens multiply together to make 36  The hundreds and tens have a total of 9  The ones digit is double to thousands digit  The whole number has a total of 21 if the digits are added together
--	--	--

**Choose 1 English activity a day**

Orangutans are in danger because of deforestation in the rainforest.  Watch the video about it and make a card to send to an orangutan to say sorry for how people are spoiling their habitat.  <a href="https://www.youtube.com/watch?v=TQQXstNh45g">https://www.youtube.com/watch?v=TQQXstNh45g</a>	Orangutans are in danger because of deforestation in the rainforest.  Watch the video about it and create poster about saving the orangutan's  <a href="https://www.youtube.com/watch?v=TQQXstNh45g">https://www.youtube.com/watch?v=TQQXstNh45g</a>	Orangutans are in danger because of deforestation in the rainforest.  Watch the video about it and Write a letter to the people cutting down the trees—explain to them why they should stop.  <a href="https://www.youtube.com/">https://www.youtube.com/</a>
---	--	---

**Choose 1 topic activity a day**

Art

If you have a printer—print the colouring page and colour in the orangutan—can you add some trees into the background.	Using the step by step guide learn how to draw an orangutan— see the guide on the next page or watch one on you tube.	Choose a rainforest animal of your choice—can you create a piece of art— this could be a model, collage, drawing .  Be creative!!!
--	---	--

**Practise these skills everyday this week**

Practise your year group spellings  (see the sheet at the end of the document)	Play TT Rockstars	Read for 10 minutes a day—it can be a book, something online— as long as you read
--	-------------------	---






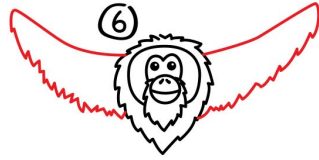

**Practise these skills as often as you can.**

I can help with the washing up	I can tie my shoe laces.	I can make a sandwich.
--------------------------------	--------------------------	------------------------

**Useful website links for extending learning**

Find out more about Endangered animals <a href="https://www.natgeokids.com/uk/?s=orangutan&amp;post_type=">https://www.natgeokids.com/uk/?s=orangutan&amp;post_type=</a>	Place Value Maths Games <a href="https://www.topmarks.co.uk/maths-games/7-11-years/place-value">https://www.topmarks.co.uk/maths-games/7-11-years/place-value</a>
Science- Humans and the environment <a href="https://www.bbc.co.uk/bitesize/topics/zp22pv4">https://www.bbc.co.uk/bitesize/topics/zp22pv4</a>	Spelling Games <a href="https://www.spellzone.com/word_lists/games-5454.htm">https://www.spellzone.com/word_lists/games-5454.htm</a>





## DATE

Friday 3rd July



Halesowen C of E  
Primary School

## YEAR GROUP

4

### Choose 1 maths activity a day

What number is 100 less?  Find which number is 100 less than the following number.  200, 365, 542, 719,825	Complete the sheet— finding the missing place value counters	Complete the sheet finding the missing numbers.  When I add 1000 to 4325 I only have to change 1 digit. Am I correct?
--	--	---

### Choose 1 English activity a day

From everything you have learnt about orangutan - create a fact file	From everything you have learnt about orangutan -create a poem	From everything you have learnt about orangutan - create a dance or drama
--	--	---

### Choose 1 topic activity a day

#### Music

On Monday we saw a picture of an orangutan in a storm.  Create some storm music using things from around your house to create rainforest instruments.  Record the music to share with us.	Can you write a rap or song about saving the rainforest?	Can you write a rap or song about saving the rainforest?  How add some music or a beat to it and perform it and record it
---	--	---

### Practise these skills everyday this week

Practise your year group spellings  (see the sheet at the end of the document)	Play TT Rockstars	Read for 10 minutes a day—it can be a book, something online— as long as you read
--	-------------------	---

### Practise these skills as often as you can.

I can help with the washing up	I can tie my shoe laces.	I can make a sandwich.
--------------------------------	--------------------------	------------------------

### Useful website links for extending learning

Find out more about Endangered animals <a href="https://www.natgeokids.com/uk/?s=orangutan&amp;post_type=">https://www.natgeokids.com/uk/?s=orangutan&amp;post_type=</a>	Place Value Maths Games <a href="https://www.topmarks.co.uk/maths-games/7-11-years/place-value">https://www.topmarks.co.uk/maths-games/7-11-years/place-value</a>
Science- Humans and the environment <a href="https://www.bbc.co.uk/bitesize/topics/zp22pv4">https://www.bbc.co.uk/bitesize/topics/zp22pv4</a>	Spelling Games <a href="https://www.spellzone.com/word_lists/games-5454.htm">https://www.spellzone.com/word_lists/games-5454.htm</a>



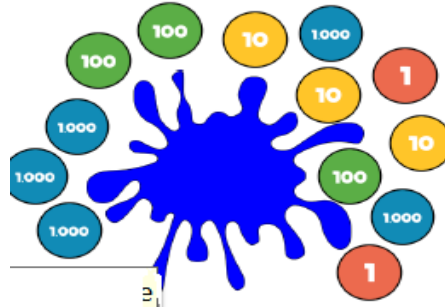
## Maths— Activity 2

Some place value counters are hidden.

The total is six thousand, four hundred and thirty two.

Which place value counters could be hidden?

Think of at least three solutions.



## Maths— Activity 3

Fill in the missing values.

$$9,523 + 10 = \boxed{\phantom{000}}$$

$$\boxed{\phantom{000}} + 3,589 = 3,689$$

$$3,891 + \boxed{\phantom{000}} = 4,891$$

Complete the table.

1,000 less	Number	1,000 more

Find 1,000 more and 1,000 less than each number.

5,000

7,500

2,359

8,999

Use concrete resources to prove you are correct.



## Spelling word list for Year 3 and Year 4

100 words that children in England are expected to be able to spell by the end of Year 4 (age 9). How many can you spell?

accident(ally)	disappear	interest	pressure
actual(ly)	early	island	probably
address	earth	knowledge	promise
answer	eight/eighth	learn	purpose
appear	enough	length	quarter
arrive	exercise	library	question
believe	experience	material	recent
bicycle	experiment	medicine	regular
breath	extreme	mention	reign
breathe	famous	minute	remember
build	favourite	natural	sentence
busy/business	February	naughty	separate
calendar	forward(s)	notice	special
caught	fruit	occasion(ally)	straight
centre	grammar	often	strange
century	group	opposite	strength
certain	guard	ordinary	suppose
circle	guide	particular	surprise
complete	heard	peculiar	therefore
consider	heart	perhaps	though/although
continue	height	popular	thought
decide	history	position	through
describe	imagine	possess(ion)	various
different	increase	possible	weight
difficult	important	potatoes	woman/women